



Second Grade **ESSENTIALS**

for Social Studies



REPRODUCIBLE!

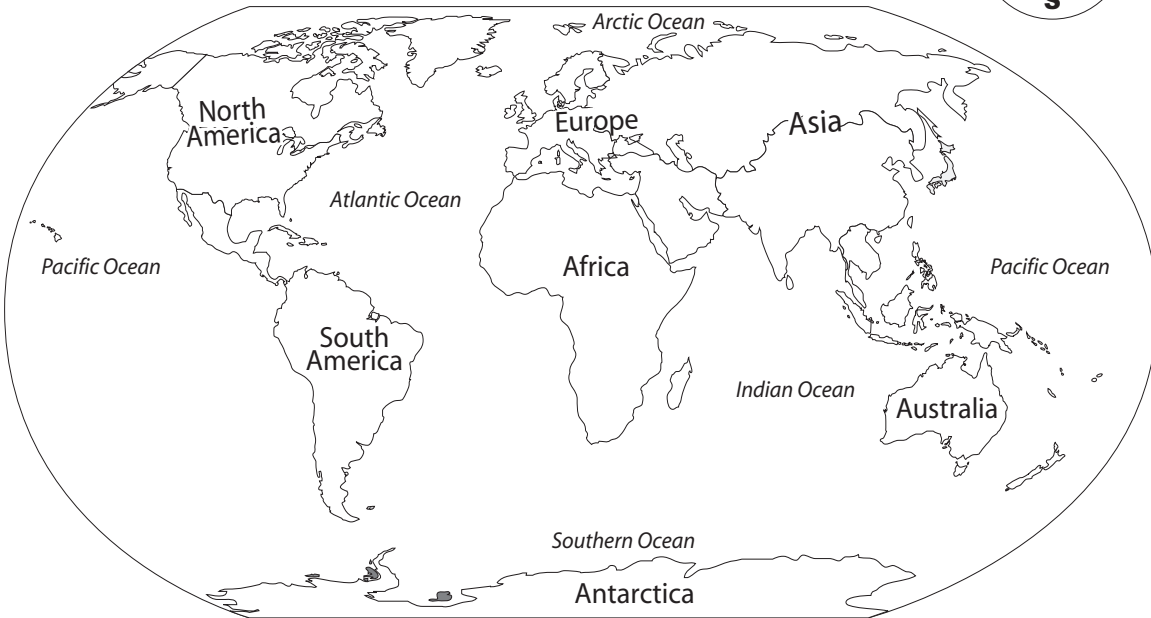
IDENTIFYING OCEANS

An **ocean** is a large body of water on Earth.
Earth has five oceans.



Find each ocean on the map. Underline each ocean name.

- Write A on the Atlantic Ocean.
- Write P on the Pacific Ocean.
- Write I on the Indian Ocean.
- Write AR on the Arctic Ocean.
- Write S on the Southern Ocean.
- Color the continents green.



Answer the questions.

1. An ocean is a large body of _____.

land water people

2. Earth has _____ oceans.

7 5 4

Susan B. Anthony's Early Years



Susan B. Anthony

Susan B. Anthony was born in 1820 in Adams, Massachusetts. Her father was a Quaker. He did not believe in games and toys, but he did believe in education.

Unlike most Americans at that time, Susan's father believed women should get as much education as they wanted. He added a classroom to his house and hired a teacher for the children.

Circle the things that were a part of Susan's life as a child.

teacher education games toys computers

Susan B. Anthony finished her schooling at age 16. Teaching was one of the few jobs a woman could have at that time. So, Susan became a teacher.

When Susan complained because she was paid less than a male teacher, she was fired. Women faced many obstacles in that time in history.

Write T for True and F for False.

Then correct any false statements to make them true.

- _____ 1. Susan's father believed that women should be educated.
- _____ 2. Susan's father loved for Susan to play with games and toys.
- _____ 3. When Susan complained because she was paid less than a male teacher, she got a raise.
- _____ 4. Women have more job choices today than in the past.

CAPITAL CITIES

A **capital** is the city where official government business takes place.

The leader of our country works in the U.S. capital city. **Washington, D.C.** is the capital of the United States.

Draw a red circle around the star for Washington, D.C.



The leader of our state works in the state capital city.

Put a star on the map in the location of your state's capital. Label the star with the name of the capital city.

Circle the correct answer.

Our state capital is _____ of Washington, D.C.

north
south
east
west

northeast
southwest
northwest
southeast